

Answer ALL questions.

Write your answers in the spaces provided.

You must write down all the stages in your working.

1 Work out  $6.3 \times 2.4$

$$\begin{array}{r|rr} & 60 & 3 \\ 20 & 1200 & 60 \\ 4 & 240 & 12 \end{array}$$

$$\begin{array}{r} 1200 \\ 240 \\ 60 \\ 12 \\ \hline 1512 \\ \small{.} \end{array}$$

$$63 \times 24 = 1512$$

$$\text{so } 6.3 \times 2.4 = 15.12$$

15.12

(Total for Question 1 is 3 marks)

DO NOT WRITE IN THIS AREA

DO NOT WRITE IN THIS AREA

DO NOT WRITE IN THIS AREA



DO NOT WRITE IN THIS AREA

DO NOT WRITE IN THIS AREA

DO NOT WRITE IN THIS AREA

2 (a) (i) Write down the value of  $5^0$

1  
(1)

(ii) Write down the value of  $5^{-2}$

$$\frac{1}{5^2} = \frac{1}{25}$$

$\frac{1}{25}$   
(1)

(b) Write  $\frac{2^5 \times 2^4}{2^3}$  in the form  $2^n$  where  $n$  is an integer.

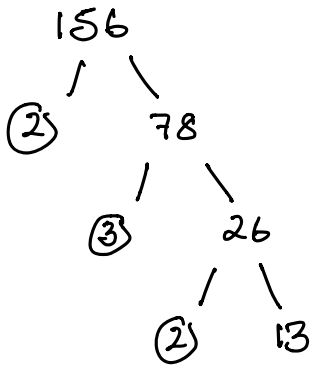
$$2^5 \times 2^4 = 2^9 \quad \frac{2^9}{2^3} = 2^6$$

$2^6$   
(2)

(Total for Question 2 is 4 marks)



3 (a) Write 156 as a product of its prime factors.



$$2 \times 2 \times 3 \times 13$$

$$2^2 \times 3 \times 13$$

(2)

(b) Find the highest common factor (HCF) of 156 and 130

$$\begin{aligned} 130 &= 13 \times 10 \\ &= 13 \times 2 \times 5 \end{aligned}$$

$$\begin{aligned} 156 &= 2 \times 2 \times 3 \times 13 \\ 130 &= 2 \times 5 \times 13 \end{aligned}$$

$$\text{HCF} = 2 \times 13$$

$$26$$

(2)

(Total for Question 3 is 4 marks)



DO NOT WRITE IN THIS AREA

DO NOT WRITE IN THIS AREA

DO NOT WRITE IN THIS AREA

4 The mean length of 5 sticks is 4.2 cm.

Nawal measured the length of one of the sticks as 7 cm.

(a) Work out the mean length of the other 4 sticks.

5 sticks = mean of 4.2

$$\begin{array}{r} \text{Total length} = 4.2 \\ \times 5 \\ \hline 21.0 \end{array}$$

4 sticks = 21 - 7 = 14

$$\begin{aligned} \text{mean of 4 sticks} &= 14 \div 4 \\ &= 3.5 \end{aligned}$$

3.5 cm (3)

Nawal made a mistake. The stick was not 7 cm long. It was 17 cm long.

(b) How does this affect your answer to part (a)?

21 - 17 = 4    4 ÷ 4 = 1

The mean would be less than 3.5

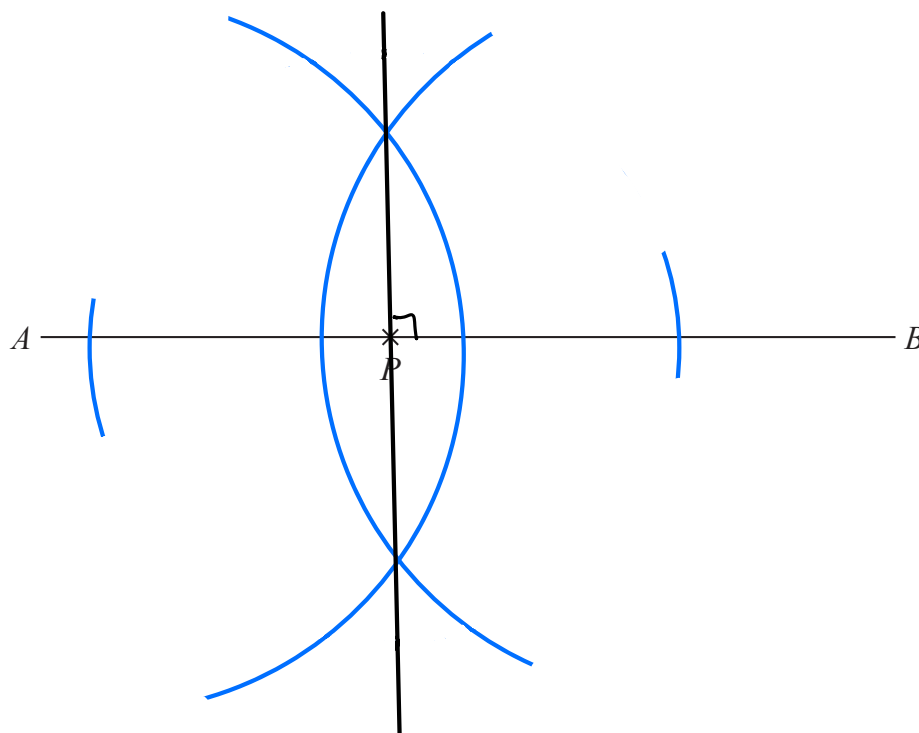
(1)

(Total for Question 4 is 4 marks)



P 6 9 5 3 3 A 0 5 2 4

- 5 The point  $P$  lies on the line  $AB$ .  
Use ruler and compasses to construct an angle of  $90^\circ$  at  $P$ .  
You must show all your construction lines.



(Total for Question 5 is 2 marks)

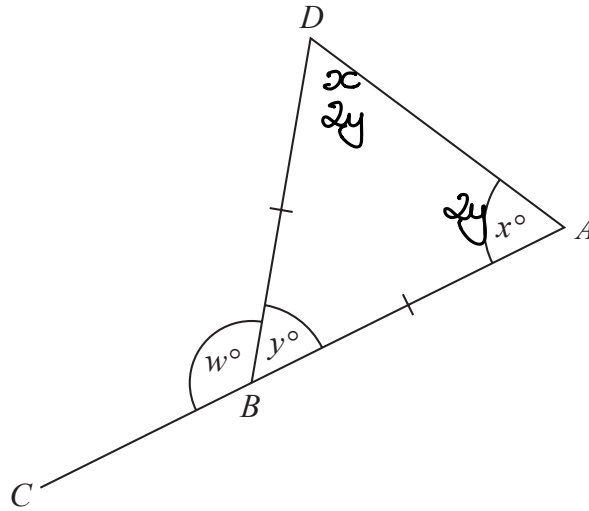
DO NOT WRITE IN THIS AREA

DO NOT WRITE IN THIS AREA

DO NOT WRITE IN THIS AREA



6 The diagram shows an isosceles triangle  $ABD$  and the straight line  $ABC$ .



$BA = BD$

$x : y = 2 : 1$

Work out the value of  $w$ .

$x : y = 2 : 1$  so  $x = 2y$

$5y = 180$

$y = 180 \div 5$

$y = 36$

$5 \overline{) 180} \begin{array}{r} 036 \\ \underline{180} \\ 0 \end{array}$

so  $w = 180 - 36 = 144$

$w = 144$

(Total for Question 6 is 4 marks)



P 6 9 5 3 3 A 0 7 2 4

7 Mano has three shelves of books.

There are  $x$  books on shelf **A**.

There are  $(3x + 1)$  books on shelf **B**.

There are  $(2x - 5)$  books on shelf **C**.

There is a total of 44 books on the three shelves.

All the books have the same mass.

The books on shelf **B** have a total mass of 7500 g.

Work out the total mass of the books on shelf **A**.

$$\begin{array}{ccc} \text{A} & \text{B} & \text{C} \\ x & 3x+1 & 2x-5 \end{array} = 44$$

$$6x - 4 = 44$$

$$6x = 48$$

$$x = 8 \text{ books}$$

$$\begin{array}{ccc} \text{A} & \text{B} & \text{C} \\ 8 & 3 \times 8 + 1 & 2 \times 8 - 5 \\ & = 25 & = 11 \end{array}$$

$$7500 \text{ g}$$

$$7500 \div 25$$

$$25 \overline{) 7500} \begin{array}{r} 300 \\ \underline{7500} \\ 00 \end{array}$$

$$\text{each book} = 300 \text{ g}$$

shelf **B**

$$8 \times 300$$

$$= 2400 \text{ g}$$

2400

g

(Total for Question 7 is 5 marks)



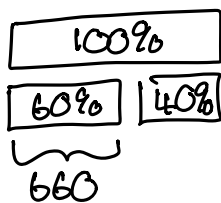
DO NOT WRITE IN THIS AREA

DO NOT WRITE IN THIS AREA

DO NOT WRITE IN THIS AREA

- 8 The normal price of a mattress is reduced by 40% in a sale.  
The price of the mattress in the sale is £660

Work out the normal price of the mattress.



$$\begin{aligned} 60\% &= 660 \\ \downarrow \div 6 & \qquad \qquad \div 6 \\ 10\% &= 110 \\ \downarrow \times 10 & \qquad \qquad \times 10 \\ 100\% &= 1100 \end{aligned}$$

£ 1100

(Total for Question 8 is 2 marks)



P 6 9 5 3 3 A 0 9 2 4

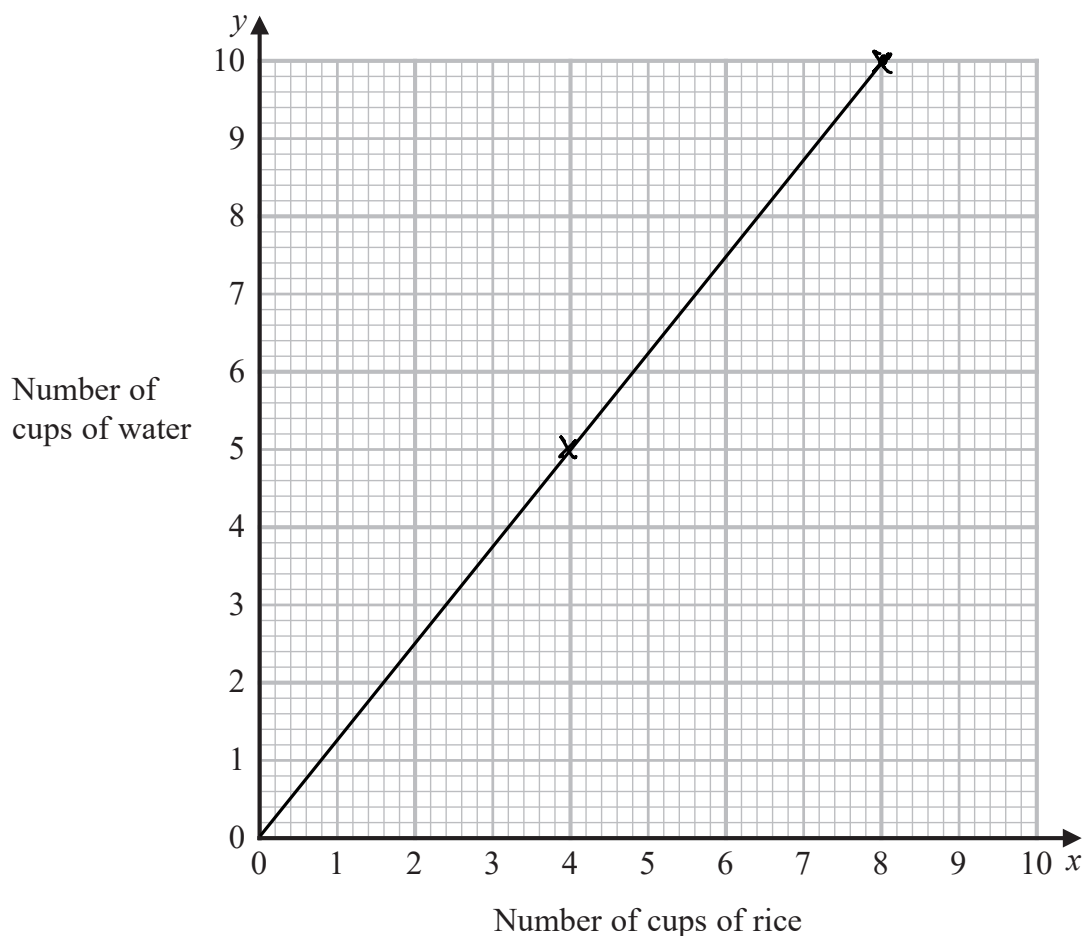


9 To cook rice

the number of cups of rice ( $x$ ): the number of cups of water ( $y$ ) = 4:5

- (a) Use this information to draw a graph to show the relationship between the number of cups of rice and the number of cups of water needed to cook rice.

$$\begin{array}{l} x : y \\ 4 : 5 \end{array} = 8 : 10$$



(2)

- (b) (i) Find the gradient of the line drawn in part (a).

$$\frac{\text{change in } y}{\text{change in } x} = \frac{10}{8} = \frac{5}{4} = 1.25$$

1.25

(1)

- (ii) Explain what this gradient represents.

The number of cups of water to each cup of rice

(1)

(Total for Question 9 is 4 marks)



DO NOT WRITE IN THIS AREA

DO NOT WRITE IN THIS AREA

DO NOT WRITE IN THIS AREA

10 The circumference of a circle is 10 m.

Work out the area of the circle.  
Give your answer in terms of  $\pi$ .

$$C = \pi d \qquad 10 = \pi d \qquad \text{so} \qquad d = \frac{10}{\pi}$$

$$r = \frac{10}{\pi} \div 2 = \frac{5}{\pi}$$

$$A = \pi r^2 = \pi \left(\frac{5}{\pi}\right)^2 = \frac{25\pi}{\pi^2}$$

.....  $\frac{25}{\pi}$  ..... m<sup>2</sup>

(Total for Question 10 is 3 marks)

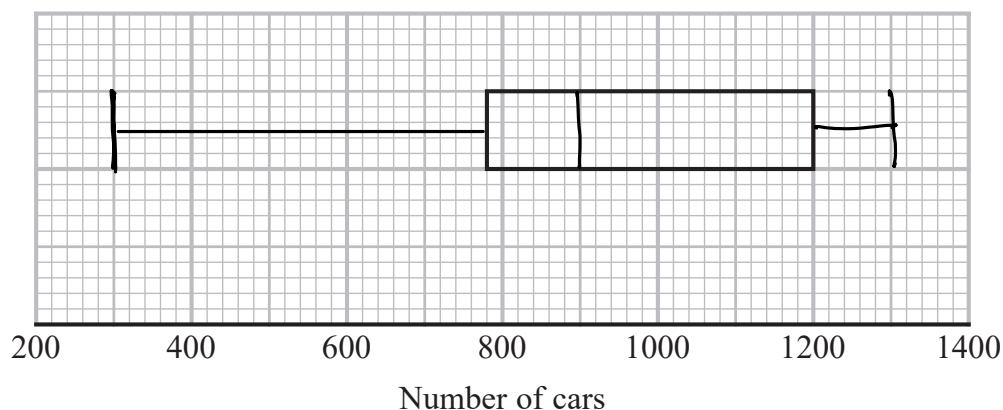


11 Alice recorded the number of cars going into a village on each of 80 days.

The incomplete table and the incomplete box plot give information about her results.

	Number of cars
Least number	300
Lower quartile	780
Median	900
Upper quartile	1200
Range	1000

$$\begin{aligned} \text{Largest} &= 300 + 1000 \\ &= 1300 \end{aligned}$$



(a) (i) Use the information in the table to complete the box plot.

(ii) Use the information in the box plot to complete the table.

(3)

On some of these 80 days Alice saw fewer than 1200 cars going into the village.

(b) Work out an estimate for the number of days Alice saw fewer than 1200 cars going into the village.

$$1200 \rightarrow \frac{3}{4} (75\%)$$

$$\begin{aligned} \frac{3}{4} \text{ of } 80 &= \frac{80 \times 3}{4} \\ &= 60 \end{aligned}$$

60

(2)

(Total for Question 11 is 5 marks)





14 Work out the value of  $27^{\frac{2}{3}} + \left(\frac{1}{2}\right)^{-3}$

$$27^{\frac{2}{3}} = \left(\sqrt[3]{27}\right)^2 = 3^2 = 9$$

$$\left(\frac{1}{2}\right)^{-3} = 2^3 = 8$$

$$\text{so } 9 + 8 = 17$$

17

(Total for Question 14 is 3 marks)

DO NOT WRITE IN THIS AREA

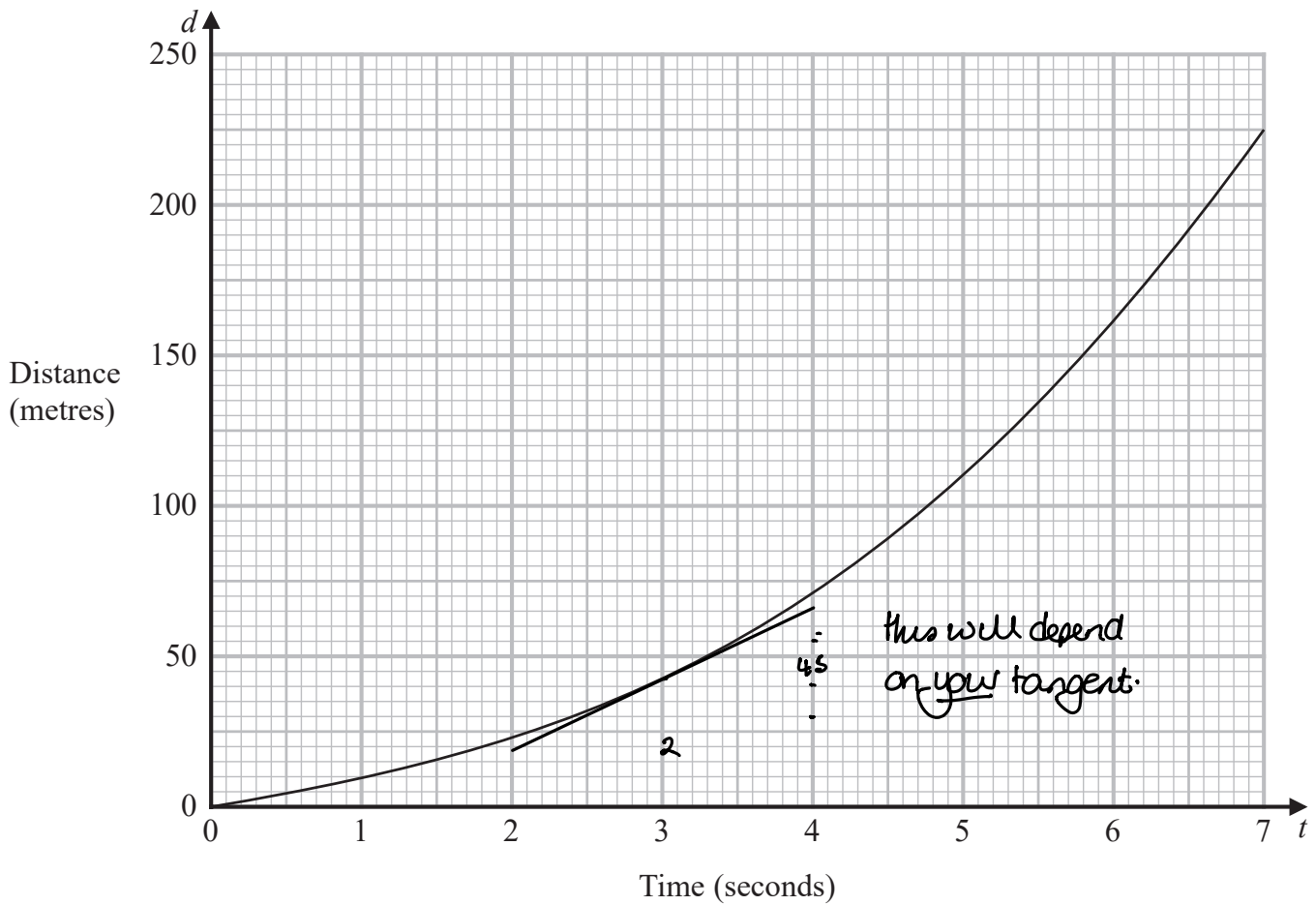
DO NOT WRITE IN THIS AREA

DO NOT WRITE IN THIS AREA



15 An object falls from rest.

Here is the distance-time graph for the distance ( $d$  metres) fallen by the object  $t$  seconds after it starts to fall.



Work out an estimate for the gradient of the graph at  $t = 3$   
You must show how you get your answer.

$$45 \div 2 = 22.5$$

22.5

(Total for Question 15 is 3 marks)



P 6 9 5 3 3 A 0 1 5 2 4

16 At the start of year  $n$  the population of a species is  $P_n$

At the start of the following year the population of the species is given by

$$P_{n+1} = kP_n \text{ where } k \text{ is a positive constant.}$$

The population of the species at the start of year 1 is 8 million.

The population of the species at the start of year 2 is 6 million.

(a) Work out the population of the species at the start of year 3

$$6 = R \times 8$$

$$R = \frac{6}{8} = \frac{3}{4}$$

$$P_3 = \frac{3}{4} \times 6$$

$$= \frac{18}{4} \quad \frac{18}{4} = \frac{9}{2} = 4.5$$

..... 4.5 ..... million  
(3)

At the start of year 5 the value of  $k$  is increased by 0.3 to a new constant value.

Louise thinks that from the start of year 5 the population of the species would increase year on year.

$$\text{so } R = 0.75 + 0.3 \\ = 1.05$$

(b) Is Louise correct?

You must give a reason for your answer.

Louise is correct; the population will now increase  
as  $k$  is greater than 1

(1)

(Total for Question 16 is 4 marks)



17 (a) Factorise  $6x^2 - 5x - 4$

$$6 \times 4 = 24 \quad 1, 24 \quad 2, 12 \quad 3, 8$$

$$6x^2 + 3x - 8x - 4$$

$$3x(2x+1) - 4(2x+1)$$

$$(3x-4)(2x+1)$$

(2)

(b) Hence, or otherwise, solve  $6x^2 - 5x - 4 < 0$

$$(3x-4)(2x+1) < 0$$

$$\frac{4}{3} \quad -\frac{1}{2}$$

$$-\frac{1}{2} < x < \frac{4}{3}$$

(2)

(Total for Question 17 is 4 marks)



P 6 9 5 3 3 A 0 1 7 2 4



18 Spinner A and spinner B are each spun once.

The probability that spinner A lands on red is  $\frac{1}{4}$

The probability that both spinner A and spinner B land on red is  $\frac{1}{24}$

Work out the probability that one spinner lands on red and the other spinner does **not** land on red.

$$\text{Red}_A \times \text{Red}_B = \text{Two Reds}$$

$$\frac{1}{4} \times \text{Red}_B = \frac{1}{24}$$

$$\text{so } \text{Red}_B = \frac{1}{6}$$

$$P(R, \text{Not } R) + P(\text{Not } R, R)$$

$$\frac{1}{4} \times \frac{5}{6} + \frac{3}{4} \times \frac{1}{6}$$

$$\frac{5}{24} + \frac{3}{24} = \frac{8}{24}$$

$$\frac{8}{24} = \frac{1}{3}$$

1/3

(Total for Question 18 is 4 marks)

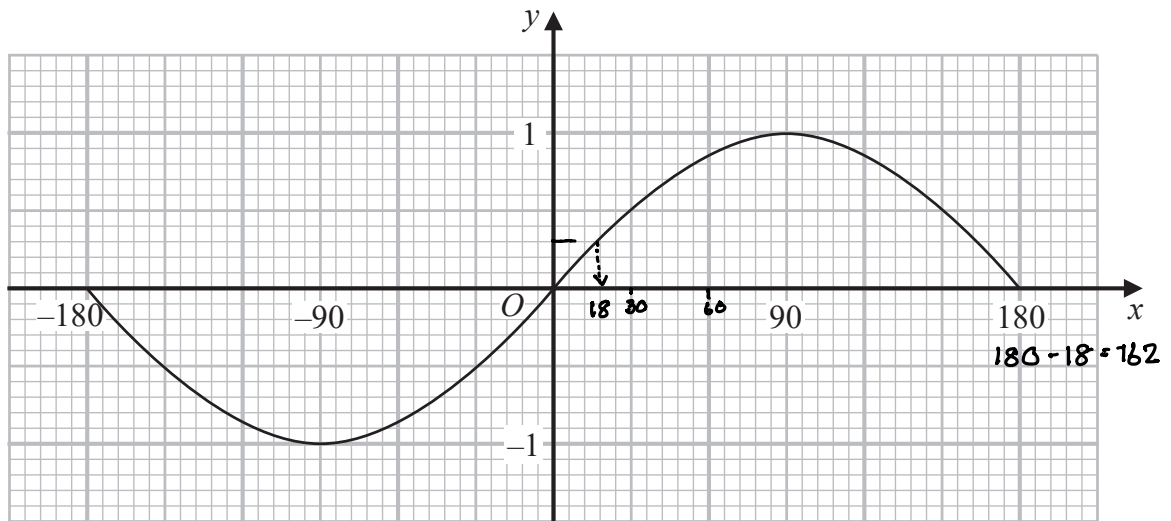
DO NOT WRITE IN THIS AREA

DO NOT WRITE IN THIS AREA

DO NOT WRITE IN THIS AREA



19 Here is the graph of  $y = \sin x^\circ$  for  $-180 \leq x \leq 180$



(a) Use the graph to find estimates for the solutions of

$$\sin x^\circ = 0.3 \quad \text{for } -180 \leq x \leq 180$$

18 and 162  
(2)

(b) Write down a value of  $x$  such that

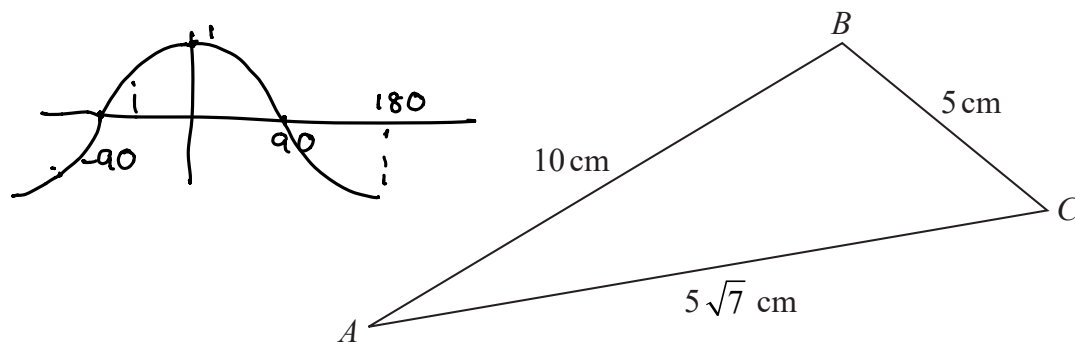
$$\sin(x + 20)^\circ = 0 \quad \text{for } -180 \leq x \leq 180$$

$x =$  -20  
or 160 (1)

(Total for Question 19 is 3 marks)



20 Here is triangle  $ABC$ .



Find the size of angle  $ABC$ .  
You must show all your working.

$$c^2 = a^2 + b^2 - 2ab \cos C$$

$$2ab \cos C = a^2 + b^2 - c^2$$

$$\cos C = \frac{a^2 + b^2 - c^2}{2ab}$$

$$\cos C = \frac{5^2 + 10^2 - (5\sqrt{7})^2}{2 \times 5 \times 10}$$

$$= \frac{125 - 175}{100}$$

$$\cos 60 = \frac{1}{2}$$

$$= \frac{-50}{100} = -\frac{1}{2}$$

$$\text{so } 90 + 30 = 120$$

120

(Total for Question 20 is 4 marks)

DO NOT WRITE IN THIS AREA

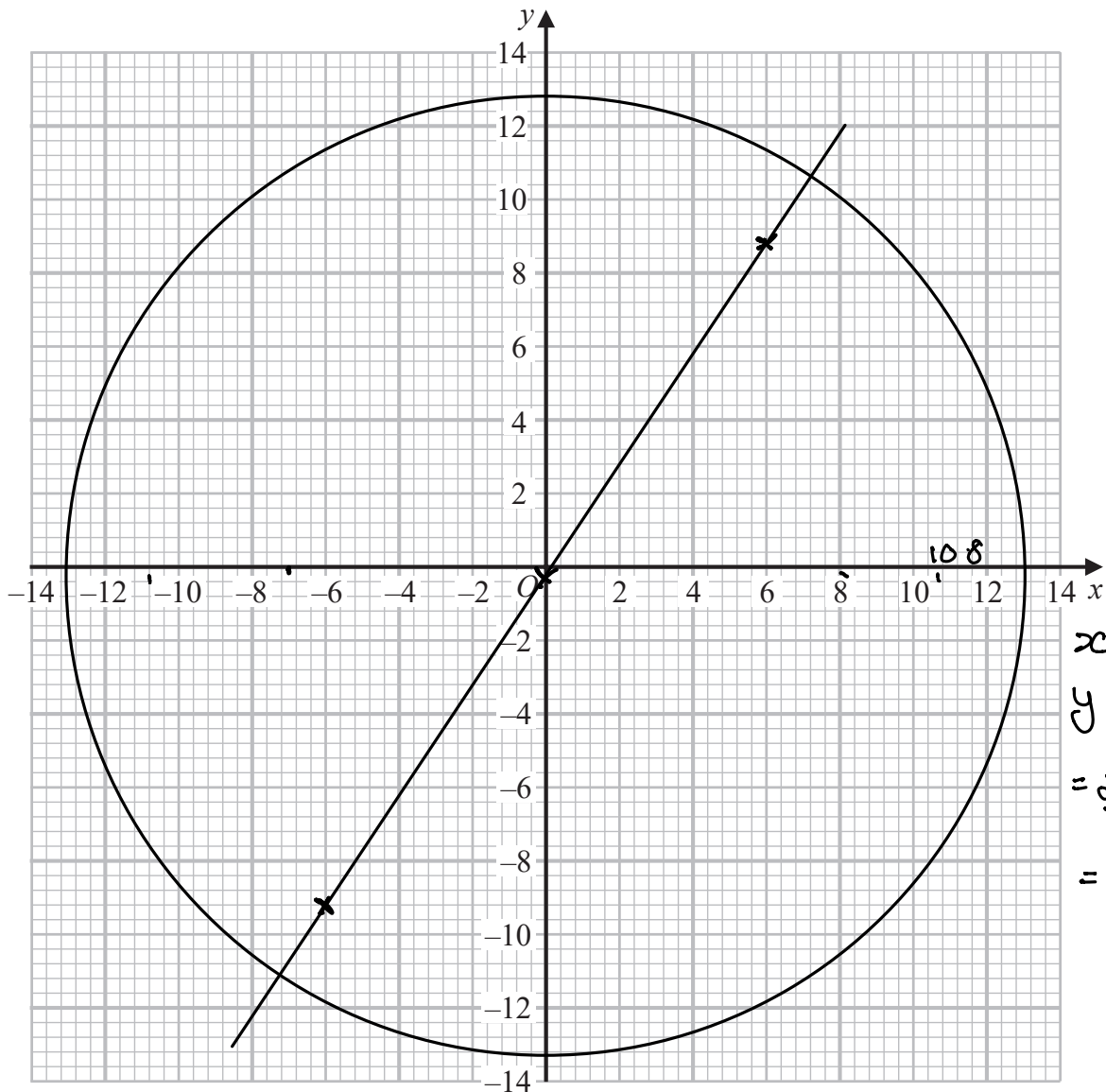
DO NOT WRITE IN THIS AREA

DO NOT WRITE IN THIS AREA



21 (a) On the grid, draw the graph of  $x^2 + y^2 = 169$

$$\sqrt{169} = 13$$



$$\begin{aligned} x &= 10.8 \\ y &= \frac{2}{3} \cdot 10.8 \\ &= \frac{21.6}{3} \\ &= 7.2 \end{aligned}$$

(2)

(b) Use your graph to find estimates for the solutions of the simultaneous equations

$$2y = 3x$$

$$x^2 + y^2 = 169$$

$$2y = 3x$$

$$y = \frac{3}{2}x$$

$$x = 0 \quad y = 0$$

$$x = -6 \quad y = -9$$

$$x = 6 \quad y = 9$$

$$x = 7.2$$

$$x = -7.2$$

$$y = 10.8$$

$$y = -10.8 \quad (3)$$

(Total for Question 21 is 5 marks)



P 6 9 5 3 3 A 0 2 1 2 4

- 22 The 2nd term of a geometric sequence is  $3 + 2\sqrt{2}$   
The 3rd term of the sequence is  $13 + 9\sqrt{2}$

Find the value of the common ratio of the sequence.

Give your answer in the form  $a + \sqrt{b}$  where  $a$  and  $b$  are integers.

You must show all your working.

$$\frac{13 + 9\sqrt{2}}{3 + 2\sqrt{2}}$$

$$= \frac{13 + 9\sqrt{2}}{3 + 2\sqrt{2}} \times \frac{3 - 2\sqrt{2}}{3 - 2\sqrt{2}}$$

$$= \frac{39 - 26\sqrt{2} + 27\sqrt{2} - 18\sqrt{2}\sqrt{2}}{9 - \cancel{6\sqrt{2}} + \cancel{6\sqrt{2}} - 4\sqrt{2}\sqrt{2}}$$

$$= \frac{39 + \sqrt{2} - 36}{9 - 8}$$

$$= \frac{3 + \sqrt{2}}{1}$$

$$3\sqrt{2}$$

(Total for Question 22 is 4 marks)

TOTAL FOR PAPER IS 80 MARKS



DO NOT WRITE IN THIS AREA

DO NOT WRITE IN THIS AREA

DO NOT WRITE IN THIS AREA

**BLANK PAGE**



P 6 9 5 3 3 A 0 2 3 2 4

DO NOT WRITE IN THIS AREA

DO NOT WRITE IN THIS AREA

DO NOT WRITE IN THIS AREA

**BLANK PAGE**

